




**INDIAN SCHOOL MUSCAT
PRIMARY SECTION**

Subject: SCIENCE	Semester I	Name:
Topic : Living and Non-living	Worksheet No. 1	Std : III / Sec_____
Resource Person: Ms. Jayshree P.		Roll No. _____
Teacher's Signature:		Date: ____ / 4 / 2018

I. Look at the pictures given below and name the special body parts which help them in breathing.


(a) 	<hr/>
(b) 	<hr/>
(c) 	<hr/>

II. Look at the picture given below and answer the following questions .

(a) Name the plant _____



(b) Draw the diagram to show the response given by the plant when you touch it ?




III. Differentiate between living things and non- living things.


Living things	Non – living things
1.	1.
2.	2.
3.	3.
4.	4.
5.	5.

IV. Think and answer.

(a) Plants don't need to move in search of food. Why?



(b) Which animal lays the biggest egg?



V. Life skills.

(a) Do you think we should throw the seeds in the soil after eating fruits?

(YES/ NO) Why?

